

# 反復練習ドリル



問. 次の式をグラフにしたものを選んでね。

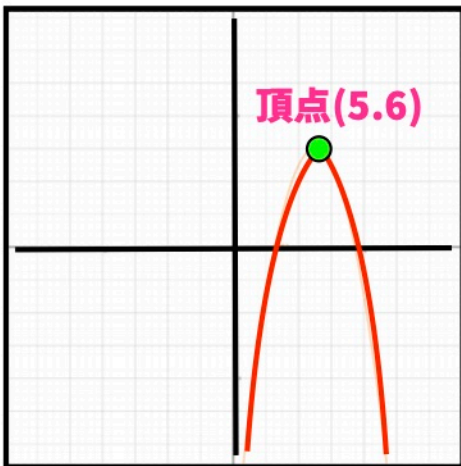
(1)  $y = (x + 3)^2 + 9$

(2)  $y = (x - 3)^2 - 3$

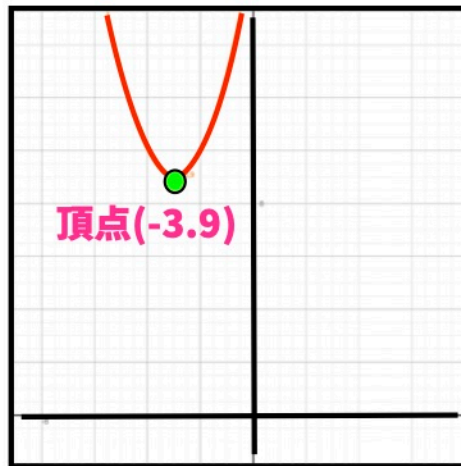
(3)  $y = -(x + 4)^2 - 7$

(4)  $y = -(x - 5)^2 + 6$

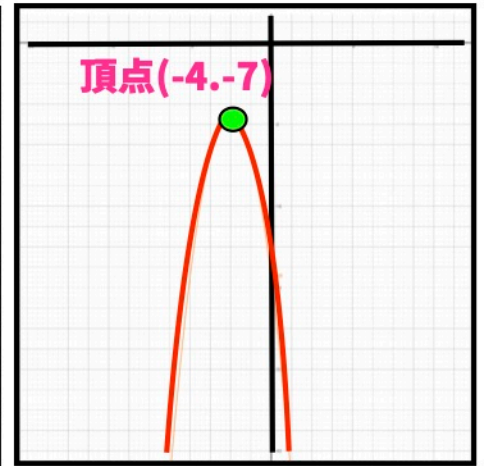
(5)  $y = -2(x - 1)^2 + 5$



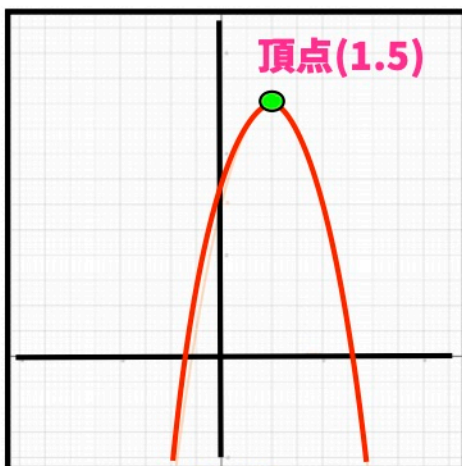
(a)



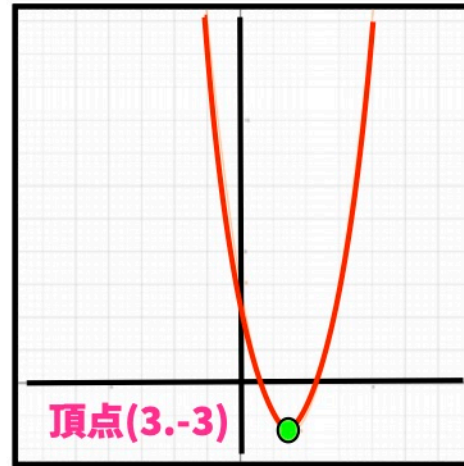
(b)



(c)



(d)



(e)